




Unit 1: Lesson 6 Deeper Learning

<p>Kim's parcel has a mass of 3.1kg when rounded to the nearest 100g. Tom's parcel has a mass of 3kg when rounded to the nearest kg. Ben's parcel has a mass of 3.14kg when rounded to the nearest 10g.</p> <p>Whose parcel is heaviest? What would the masses be for: Kim's parcel to be heaviest? Tom's parcel to be heaviest? Ben's parcel to be heaviest?</p> 	<p>Kim's parcel has a mass of 3.1kg when rounded to the nearest 100g. Tom's parcel has a mass of 3kg when rounded to the nearest kg. Ben's parcel has a mass of 3.14kg when rounded to the nearest 10g.</p> <p>Whose parcel is heaviest? What would the masses be for: Kim's parcel to be heaviest? Tom's parcel to be heaviest? Ben's parcel to be heaviest?</p> 
<p>Kim's parcel has a mass of 3.1kg when rounded to the nearest 100g. Tom's parcel has a mass of 3kg when rounded to the nearest kg. Ben's parcel has a mass of 3.14kg when rounded to the nearest 10g.</p> <p>Whose parcel is heaviest? What would the masses be for: Kim's parcel to be heaviest? Tom's parcel to be heaviest? Ben's parcel to be heaviest?</p> 	<p>Kim's parcel has a mass of 3.1kg when rounded to the nearest 100g. Tom's parcel has a mass of 3kg when rounded to the nearest kg. Ben's parcel has a mass of 3.14kg when rounded to the nearest 10g.</p> <p>Whose parcel is heaviest? What would the masses be for: Kim's parcel to be heaviest? Tom's parcel to be heaviest? Ben's parcel to be heaviest?</p> 